

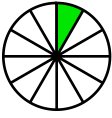
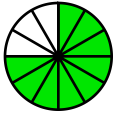
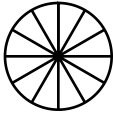
Name : _____

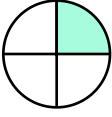
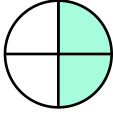
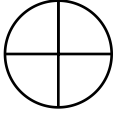
Score : _____

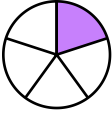
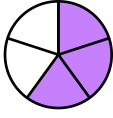
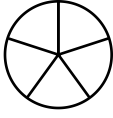
Teacher : _____




Date : _____

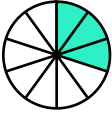
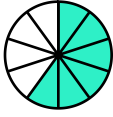
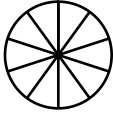
Visually Adding Simple Fractions

1)  +  = 
 $\frac{1}{12} + \frac{9}{12} =$ _____

2)  +  = 
 $\frac{1}{4} + \frac{2}{4} =$ _____

3)  +  = 
 $\frac{1}{5} + \frac{3}{5} =$ _____

4)  +  = 
 $\frac{1}{9} + \frac{6}{9} =$ _____

5)  +  = 
 $\frac{3}{10} + \frac{6}{10} =$ _____